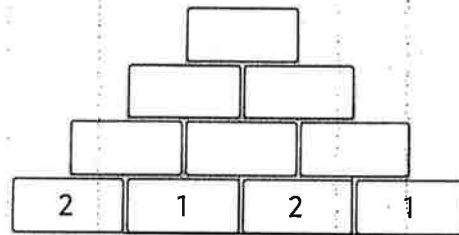
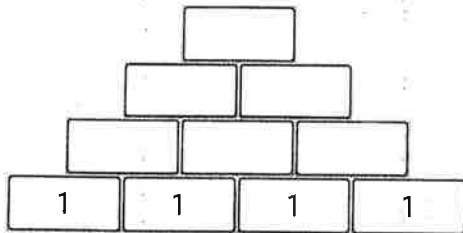
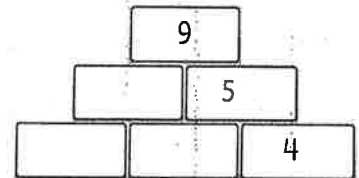
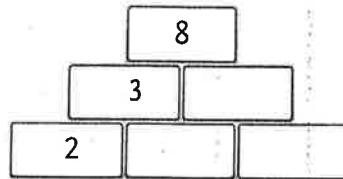
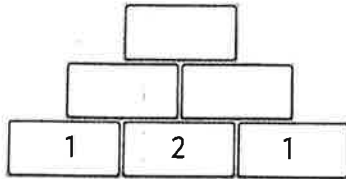
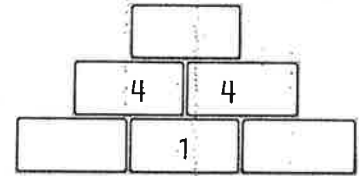
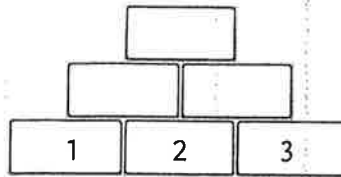
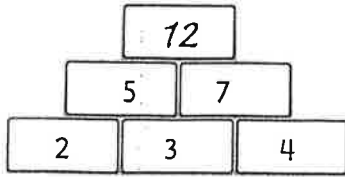


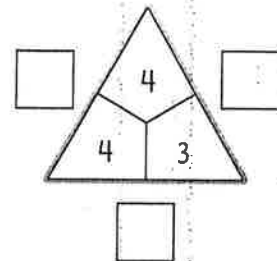
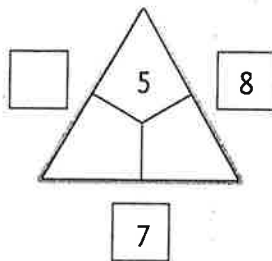
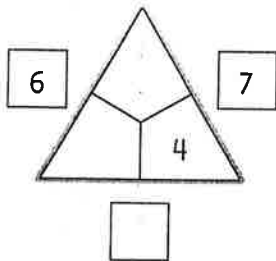
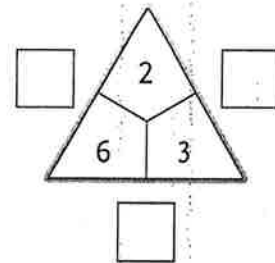
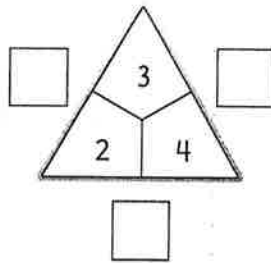
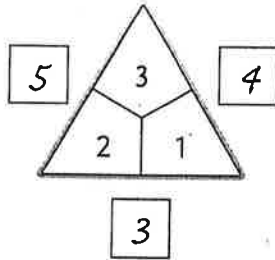
1

maak de getallenmuurtjes.



2

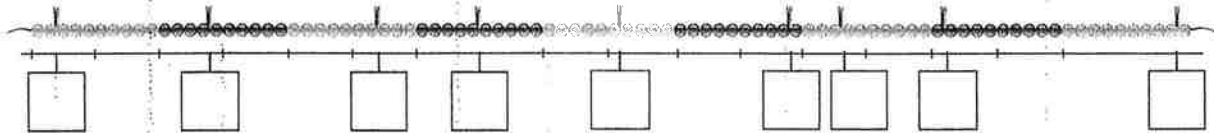
vul in.



1 maak de sommen.

$15 - 1 =$		$16 - 4 =$		$18 - 5 =$	
$15 - 2 =$		$16 - 5 =$		$18 - 6 =$	
$15 - 3 =$		$16 - 6 =$		$18 - 7 =$	
$15 - 4 =$		$16 - 7 =$		$18 - 8 =$	
$15 - 5 =$		$16 - 8 =$		$18 - 9 =$	
$15 - 6 =$		$16 - 9 =$		$18 - 10 =$	

2 welke getallen horen erbij?



3 maak de sommen.

$6 + 2 =$		$4 + 5 =$		$7 + 3 =$	
$6 + 4 =$		$4 + 6 =$		$7 + 5 =$	
$6 + 6 =$		$4 + 8 =$		$7 + 7 =$	
$6 + 8 =$		$4 + 10 =$		$7 + 9 =$	

4 maak de sommen.

$2 + 2 + 2 + 2 + 2 =$		$3 + 3 + 3 + 3 =$	
$2 + 2 + 2 + 2 =$		$3 + 3 + 3 + 3 + 3 + 3 =$	
$4 + 4 + 4 =$		$3 + 3 + 3 =$	
$4 + 4 + 4 + 4 + 4 =$		$4 + 4 + 4 + 4 =$	