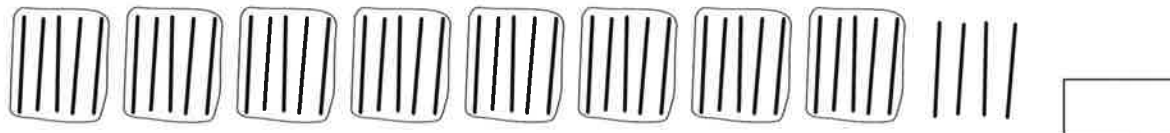

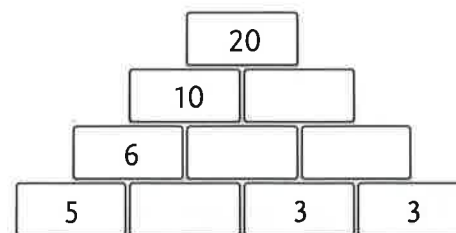
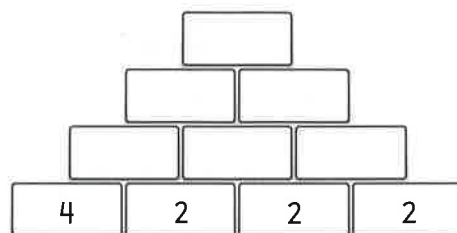
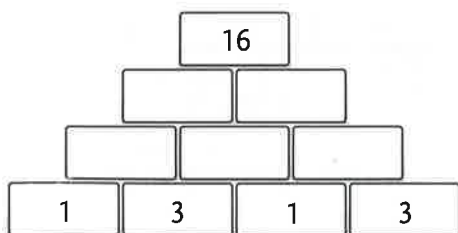
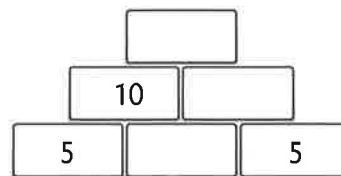
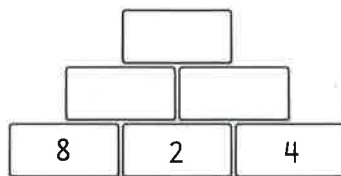
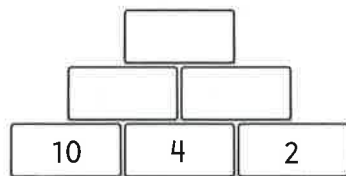
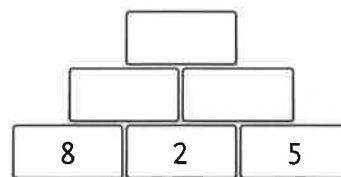
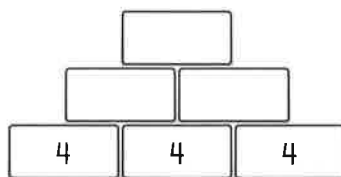
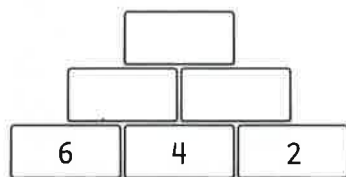


3 welke getallen horen erbij?



4 maak de getallenmuurtjes.



5 maak de sommen.

10 - 1 =		15 - 6 =		10 - 5 =		9 - 4 =	
11 - 2 =		16 - 7 =		12 - 6 =		10 - 5 =	
12 - 3 =		17 - 8 =		14 - 7 =		11 - 6 =	
13 - 4 =		18 - 9 =		16 - 8 =		12 - 7 =	
14 - 5 =		19 - 10 =		18 - 9 =		13 - 8 =	