

1 Reken zo kort mogelijk uit.

a

$$117 : 9 =$$

$$136 : 8 =$$

$$133 : 7 =$$

$$126 : 6 =$$

b

$$459 : 8 =$$

$$434 : 7 =$$

$$299 : 9 =$$

$$288 : 6 =$$

c

$$355 : 3 =$$

$$767 : 6 =$$

$$1076 : 8 =$$

$$1488 : 9 =$$

2 Reken uit je hoofd.

a

$$16 : 4 =$$

$$160 : 4 =$$

$$1600 : 40 =$$

$$1600 : 400 =$$

b

$$56 : 8 =$$

$$5600 : 80 =$$

$$560 : 80 =$$

$$5600 : 8 =$$

c


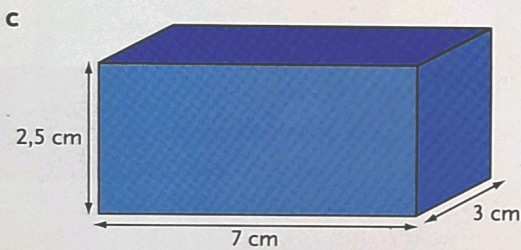
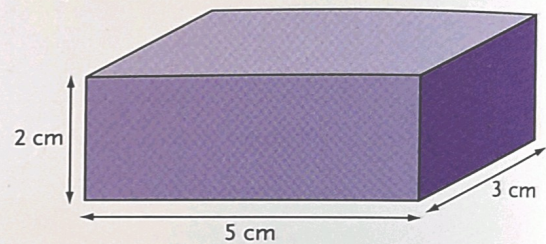

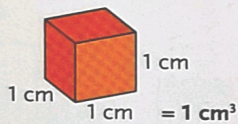
$$132 : 12 =$$

$$1320 : 12 =$$

$$13\ 200 : 120 =$$


$$13\ 200 : 1200 =$$

3 Wat is de inhoud in  $\text{cm}^3$ ?




4 Hoeveel gekleurde blokken passen er in de doos?  
Elk blok bestaat uit blokjes van  $1\text{ cm}^3$ .


a



b



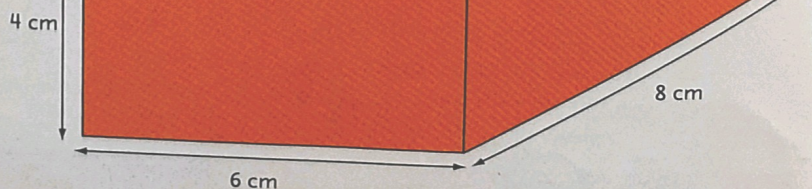
c



d



4 cm



6 cm

8 cm

