

$$\square + \bigcirc + \triangle = 28$$


$$\triangle = \square + \square$$

$$\square = \bigcirc + \bigcirc$$

Op de achterkant zie je **REKENRAADSELS 2**


Reken uit wat de waarde is van de 3 vormen.

De waarde van




is ...

De waarde van



is ...

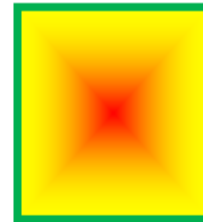
De waarde van



is ...

## Antwoorden Rekenraadsels 2 Blad 47

De waarde van




is 8

De waarde van



is 16

De waarde van



is 4